










2 = 
 3 = 
 4 = 
 5 = 
 6 = 
 7 = 
 8 = 
 9 = 

5+1 4+3 3+3 2+4 9-1 4+2 3+5 5+1
 1+5 6+2 6+3 2+7 2+6
 6+1 5+3 5+4 1+4 8+1 6-1
 7-1 1+7 7+2 8-3 4+1 7-2
 2+5 9-3 10-1 3+1 5-2 2+3
 1+5 4+4 1+2 9-5 3+6
 7+1 6+2 5-1 4-2 2+1
 5+2 8-1 4+5 6-3 5-3 1+3 5+4
 3+4 8-2 3+5 2+2 1+8 10-2
 1+6 4+2 2+6 1+7 10-2
 9-2 3+3 5+3 1+5 9-1

EDUCAÇÃO E TRANSFORMAÇÃO

Zał. Dodawanie i odejmowanie w zakresie 10



ZNAJDŹ 7 RÓŻNIC MIĘDZY OBRAZKAMI

